

You have 15 minutes - Start now.

Use the scroll bar to move down the page

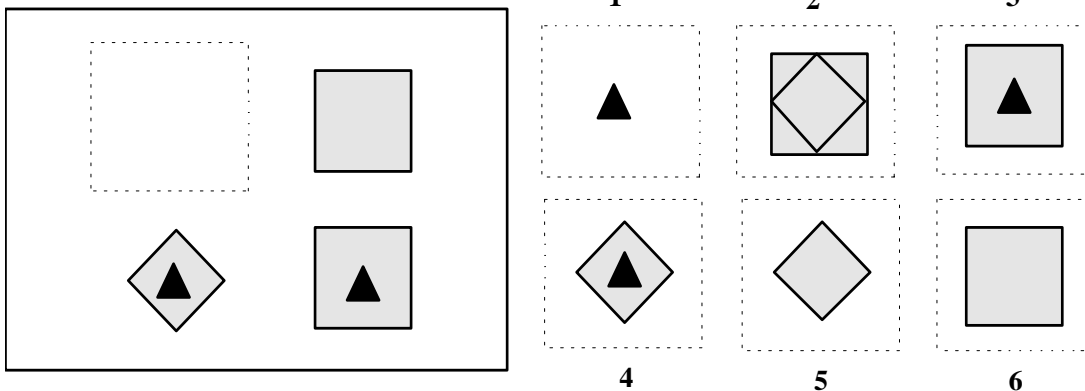
1. Identify the one alternative that has a similar meaning to the saying:

“As you make your bed, so must you lie in it.”

- 1 It's easier to make a bed when lying on top of it
 - 2 It's nice to sleep in your own bed
 - 3 Beds should be custom made for height so you can fit in it
 - 4 Every action has a consequence
2. Tool is to pliers as car is to
1. drive 2. wheels 3. vehicle 4. jeep 5. transport
3. What is the missing number?
- 4 16 ? 256 1024
4. Four of the following words are similar in some way. Identify the remaining two words.
1. investigation 2. exclamation 3. examination 4. exhortation
5. inquisition 6. evaluation
5. What number should replace the asterisk?

26	.	12
.	15	8
18	11	*

6. Which piece completes the pattern?



7. Which part, if any, of this sentence is incorrect?

1	2	3	4
At the supermarket,	the price of orange's	is	\$3 per kilo.

8. Identify which two statements together prove that:

My largest dog is a Rottweiler

- 1 My only black dog is a Rottweiler
- 2 I have four large dogs
- 3 Three of my dogs are Rottweilers
- 4 Rottweilers are large dogs
- 5 My largest dog is black.

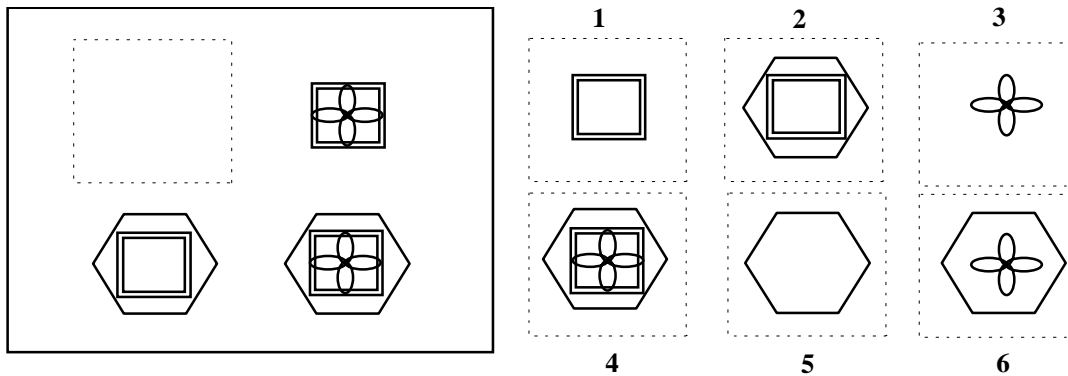
9. I have 75 per cent more money in the bank than my brother has. My brother has \$800 in the bank. How much money do I have in the bank?

10. Find the word that is most similar in meaning to:

aggregate

- 1. irritate 2. organise 3. annoy 4. conglomerate 5. compile

11. Which piece completes the pattern?



12. What are the missing numbers?

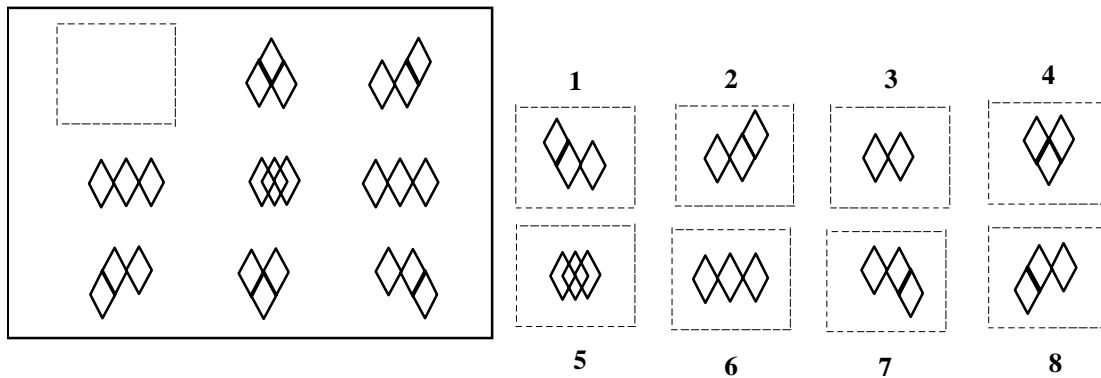
107 105 35 33 ? 9 ?

13. Which words are spelled incorrectly?

- 1. equiped 2. phlegm 3. schedule 4. circut 5. Astronaut

14. It is three times further to Smalltown than to Largetown. It is six times further to Toussaint than to Largetown. Toussaint is 300 km away. How far is it to Smalltown?

15. Which piece completes the pattern?



16. *Study* is to *read* as *exercise* is to

1. heartrate 2. run 3. shoes
4. fitness 5. health

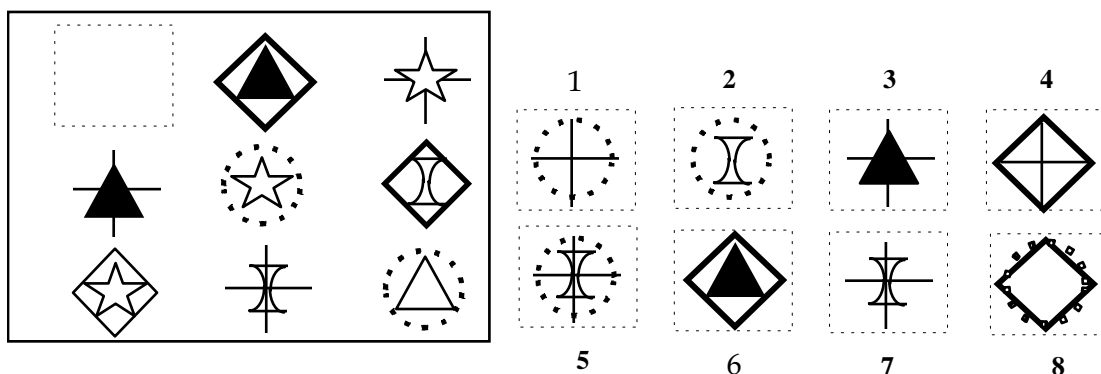
17. Five friends went fishing, and caught 72 fish. One caught $\frac{1}{6}$ of the fish. Another caught $\frac{1}{4}$ of the fish. The remaining friends caught the same number of fish as each other. How many fish did each of these three catch?

18. Find the word that is most similar in meaning to:

penchant

1. inclination 2. medallion 3. similarity 4. trophy 5. thoughtful

19. Which piece completes the pattern?



20. Four of the following words are similar in some way. Identify the remaining two words.

1. jubilant 2. buoyant 3. hydrant
4. exultant 5. dominant 6. Triumphant

21. Oranges cost 30c per kilo less than apples. Kiwi fruits cost 90c per kilo more than apples. Pears are exactly midway in price between oranges and kiwi fruit. What is the difference in price between apples and pears?

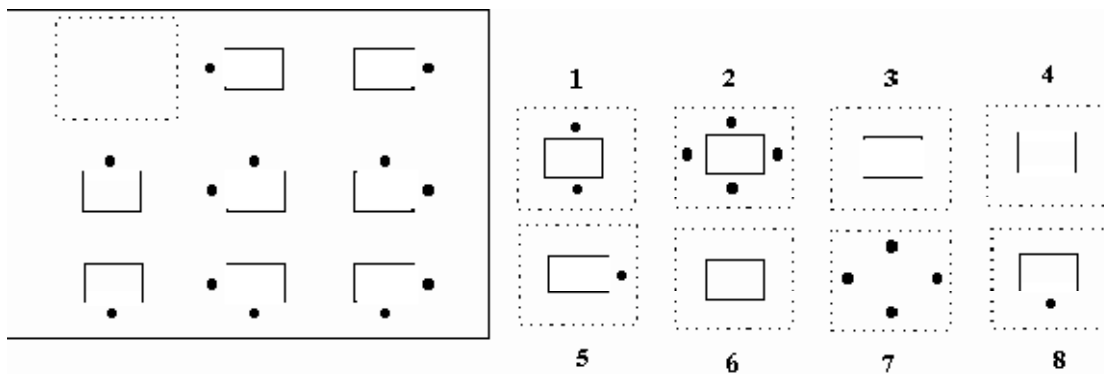
22. Which word would best suggest loud?

- 1 Sunset
- 2 Crowd
- 3 Sandwich
- 4 Garden
- 5 Feather

23. What number should replace the asterisk?

112	28	*
80	20	5
16	.	1

24. Which piece completes the pattern?



25. Which words are spelled incorrectly?

- 1. registration 2. circumstance 3. equality 4. concientiousness 5. balance

26. Which part, if any, of this sentence is incorrect?

1	2	3	4
How many	good bargains	was there	at the sale?

Once the 15 minute time limit is up, or you have finished the questions, click on the 'Next' icon below and mark your answers from the answers supplied.